

**2017
MUSIC**

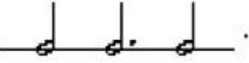

Total marks : 70

Time : 3 hours

General instructions:

- i) *Approximately 15 minutes is allotted to read the question paper and revise the answers.*
- ii) *The question paper consists of 34 questions.*
- iii) *Marks are indicated against each question.*
- iv) *Candidates are to draw staff lines in the answer book as required.No separate staff manuscript shall be provided.*
- v) *Internal choice is given in questions carrying 4 and 6 marks.*

N.B: *Check that all pages of the question paper is complete as indicated on the top left side.*

- 1. Name two instruments from the early period. **1**
- 2. Name two classical era composers. **1**
- 3. What are the primary chords in a major scale? **1**
- 4. In what type of songs is pentatonic scale mainly used? **1**
- 5. Define modulation. **1**
- 6. Define Una corda. **1**
- 7. Write the correct time signature . **1**
- 8. What is the difference between an auxiliary note and passing note? **1**
- 9. What interval will a diminished 7th and minor 3rd invert into? **1**
- 10. Name the cadence that always ends on the dominant. **1**
- 11. Name the following notes:  **1**

20. Using semiquaver triplets. Write a three note pattern broken chord. Finish no less than two leger lines above or below the staff. Use accidentals. 1+1=2

- a) V in G major going up in treble clef.
b) iv in B^b minor going down in bass clef

21. Using 4 part chords, draw an imperfect cadence in C major on a grand staff. 2

22. Name the intervals and write their inversions. 2



Answer any **five** from questions 23-29.

23. Write briefly about baroque music. 4

24. On the following minor scales ascending, write triads on the tonic, supertonic, subdominant and dominant degrees on the scale and label them with roman numerals and chord symbols. Use its accidentals. 2+2=4

- a) G harmonic minor on alto clef.
b) F[#] melodic minor on bass clef.


25. Draw the following scales going up and down in tenor clef using quaver notes. Insert key signature. 2+2=4

- a) G melodic minor
b) A^b major

26. Using semibreve, write out 4 part cords for SATB using the chords shown by the roman numerals. Double the root in each case, even if the chord is in first or second inversion. 4x1=4

Answer any **three** from questions 30-34.

30. Use notes from the given chord symbols and roman numerals, write tunes above and bass line for the following. 3x2=6

a) 

b) 

31. Identify the cadence and write the chords in roman numerals. 3x2=6



32. Label the chords with roman numerals below to show the chord progression. 3x2=6

a) C major 

b) E minor 

c) F major 

33. Describe briefly program music and art song of the roman period. **6**

34. Look at the music and answer the following questions. **1x6=6**

Con, moto, tranquillo.

The musical score is written for piano in 3/4 time, marked 'Con, moto, tranquillo'. It consists of two systems of two staves each. The first system shows the beginning of the piece with a treble and bass clef, a key signature of two flats, and a 3/4 time signature. The second system continues the piece, ending with a double bar line and repeat dots. An asterisk (*) is placed above the eighth note in the sixth bar of the second system.

- a) In what key is this piece in?
- b) In what form is this piece composed?
- c) What does con moto, tranquillo mean?
- d) Why are these 2½ beat in the last bar?
- e) Name the interval in bar 6 marked (*)
- f) Describe the shape of this piece.
