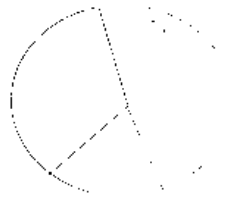


### Ln.13. HANDLING DATA

#### DO THE FOLLOWINGS


1. 100 children were asked which kind of cartoon movies were their favorite. Look at the table that gives their replies. color and label circle graph accordingly.

Ben 10	36
Spider man	24
Tom and jerry	20
Doremon	20



2. Information about how children in class V come to school, is given in the below table. Label the circle graph accordingly.

Cars	20
Buses	60
Cycles	30
Walking	10



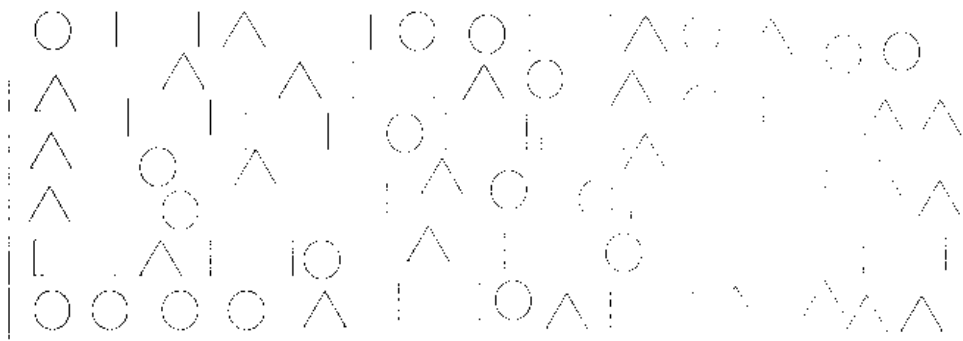
3. Complete the tally chart.

Favorite games of students in class V.

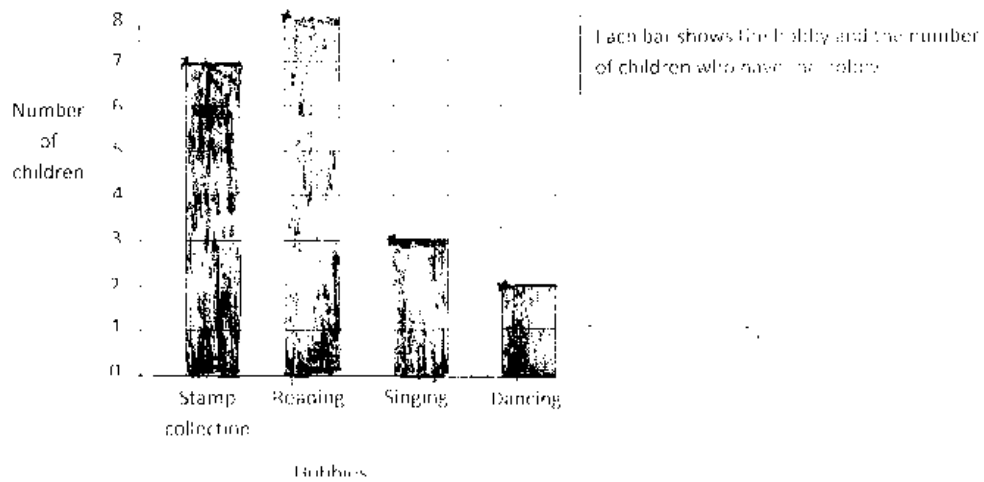
Games	Tally marks	Number
Foot ball		
Cricket		
Basket ball		
Chess		

- Which is the most popular game?
- Which is the least popular?
- Which two games are equally popular?
- How many more children like cricket than chess?
- How many children are there in all in class V?

4. Build a tally chart using these shapes.



5. Study the graph and answer the question.



Fill in the blanks by studying the bar graph

- a) ..... Children have Reading as a hobby.
- b) ..... Children have singing as a hobby.
- c) 2 children likes ..... hobby.
- d) ..... children likes Stamp collection than singing.