

Competency: Problem Solving Ability.

1. Draw the Line of Symmetry for the following:

A

M

U

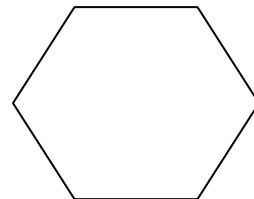
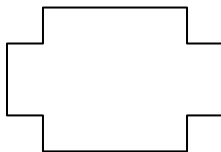



W

E

B

C

D



Teacher's Signature

Parent's Signature