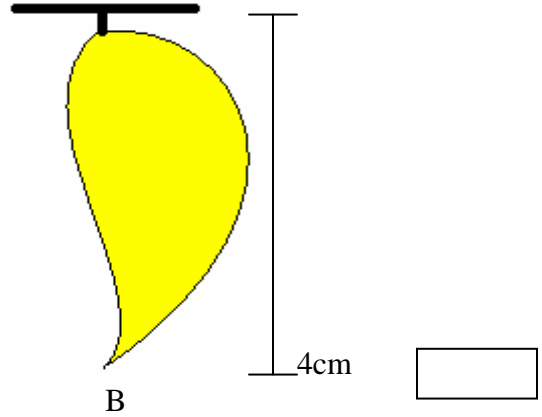
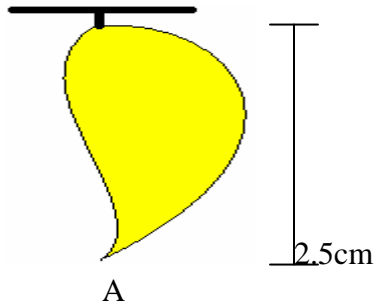
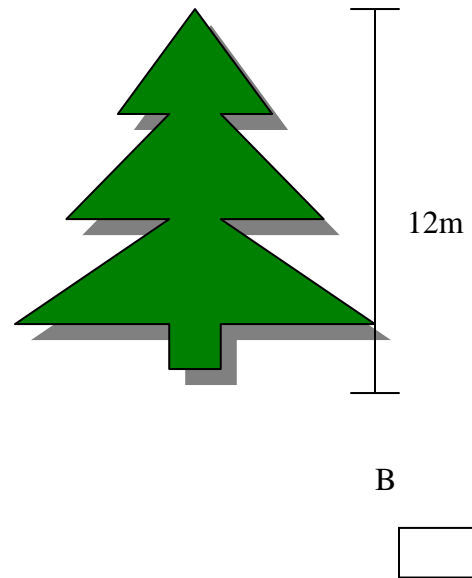
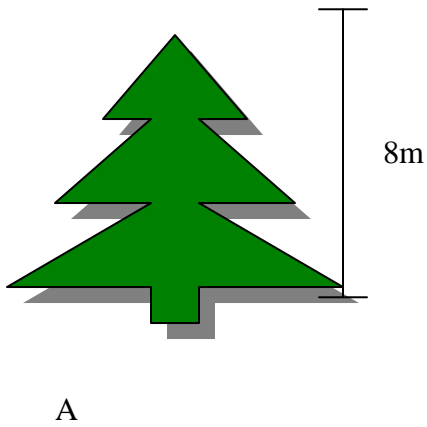


## CHAPTER 2 LONG AND SHORT

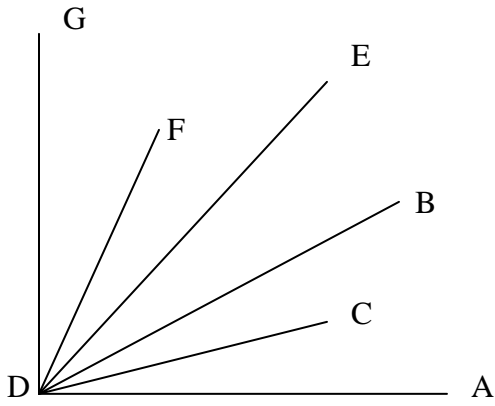
Ques.1 Which mango is shortest?  
कौन सा आम छोटा है ?



Ques.2 Which tree is longest?  
कौन सा पेड सबसे बडा है?



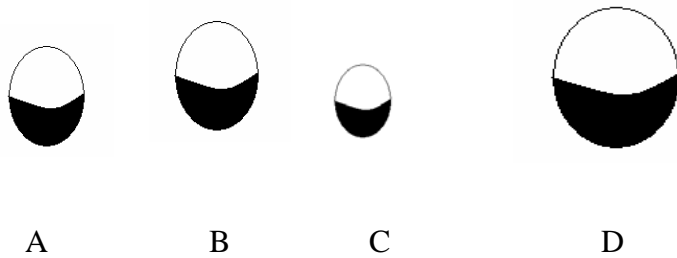
Ques.3 Which dots is nearest to D?  
 कौन सा बिन्दू D के पास है ?




Ques.4 Which figure is longer?  
 कौन सी आकृति बड़ी है ?



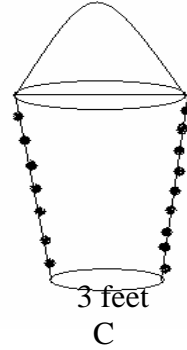
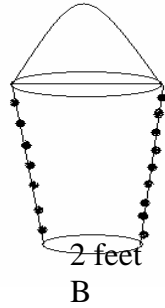

Ques.5 Which moon is longest in figure?  
 कौन सा चन्द्रमा की आकृति बड़ी है ?



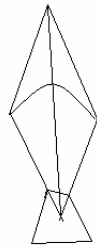
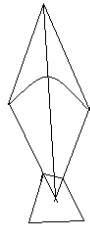
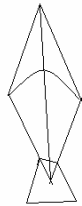

Ques.6 Which is shorter: sun or star?  
 कौन सा छोटा है, सूरज या तारा ?



Ques.7 Which bucket is longest of all?  
सभी बाल्टियों में कौन सी बाल्टी बड़ी है |



Ques.8 Which kite is shortest?  
कौन सी पतंग छोटी है |



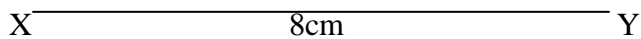

A

B

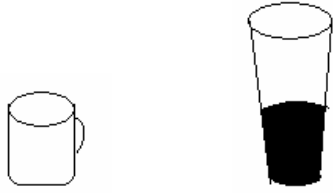
C

D

Ques.9 Which line is shorter AB or XY?  
कौन सी लाईन छोटी है ?



Ques.10 Which is longer cup or glass?  
कौन सा बड़ा है कप या गिलास ?



Cup/ कप

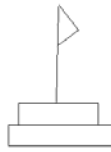
Glass / ग्लास

Ques.11 Which Flag is longest of all?

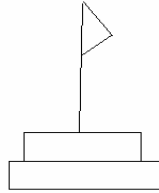
सभी झंडो मे कौन सा झंडा बडा है



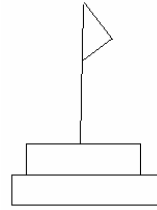
A



B



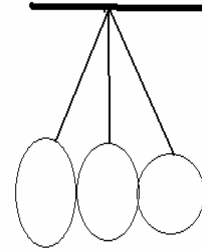

C



D

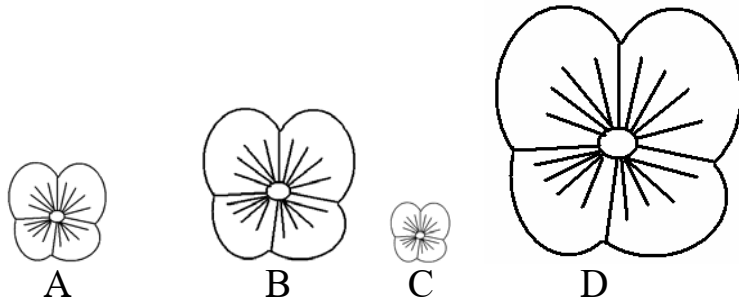
Ques.12 Which fruit is shortest?

कौन सा फल सबसे बडा है ?

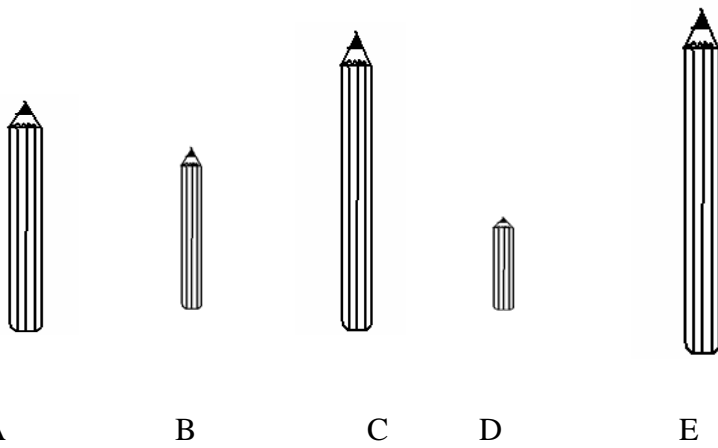


Ques.13 Which flower is longer?

कौन सा फूल सबसे बडा है ?




Ques.14 Which pencil is longer?  
 कौन सी पेंसिल बडी है ?




Ques.15 Which triangle is longer in all of them.  
 कौन सा त्रिभुज बडा है ?

