

Topic : Can we share?

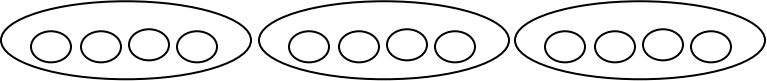


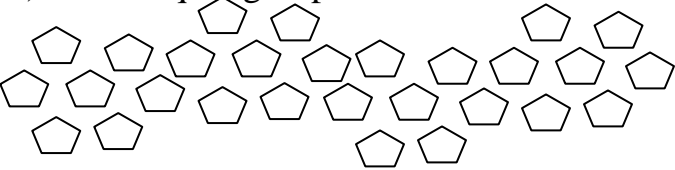

Date _____

WORK SHEET No. 1

Month _____

Competency: Formation of Numbers

1. Make equal groups and write the division facts for the following;

<p>a) Make equal groups of 4</p> 	$\square \div \square = \square$
<p>a) Make equal groups of 2</p> 	$\square \div \square = \square$
<p>a) Make equal groups of 6</p> 	$\square \div \square = \square$
<p>a) Make equal groups of 7</p> 	$\square \div \square = \square$
<p>a) Make equal groups of 5</p> 	$\square \div \square = \square$

Teacher's Signature

Parent's Signature