

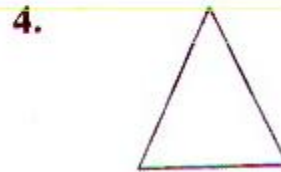

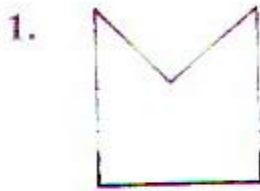
WORK SHEET NO. 2

Date_____


Month_____

Competency : Understanding Basic Concepts

1. Tick (✓) mark the face of the brick.



2. Observe the following pictures and answer the question below.



Which wall is stronger and why?

Teacher's Signature

Parent's Signature